

Addieren und subtrahieren



1

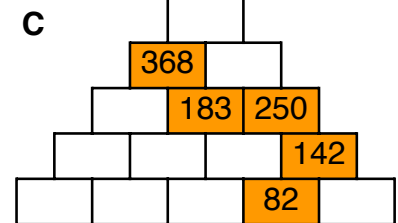
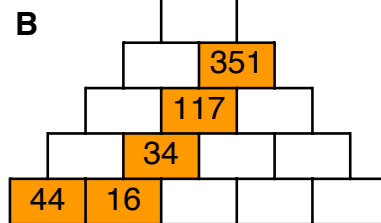
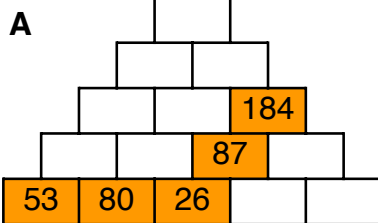
A Zahl	380	130	460	130	220
das Doppelte					

B Zahl	436	325	294	298	218
das Doppelte					

C Zahl	440	660	740	780	940
die Hälfte					

D Zahl	870	350	730	310	730
die Hälfte					

2



AuS 6

3 $622 + 170 =$ _____
 $980 - 450 =$ _____
 $581 + 290 =$ _____
 $922 - 580 =$ _____
 $715 + 280 =$ _____

$393 - 140 =$ _____
 $355 + 410 =$ _____
 $907 - 380 =$ _____
 $510 + 310 =$ _____
 $870 - 740 =$ _____

$783 + 190 =$ _____
 $942 - 470 =$ _____
 $797 + 150 =$ _____
 $900 - 120 =$ _____
 $157 + 430 =$ _____

4

1000

$251 +$ _____

$761 +$ _____

$716 +$ _____

$290 +$ _____

$263 +$ _____

1000

$528 +$ _____

$478 +$ _____

$539 +$ _____

$679 +$ _____

$165 +$ _____

1000

$624 +$ _____

$321 +$ _____

$124 +$ _____

$751 +$ _____

$611 +$ _____

Addieren und subtrahieren



1

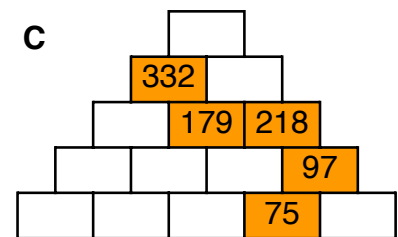
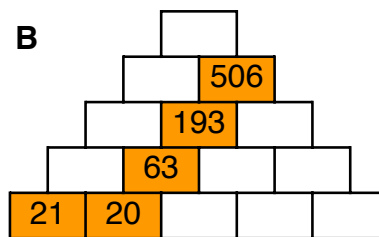
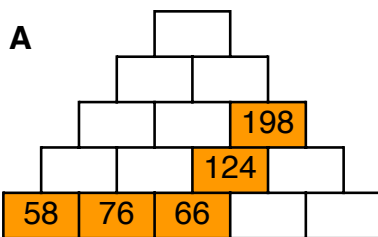
A Zahl	290	180	430	120	490
das Doppelte					

B Zahl	123	379	429	230	450
das Doppelte					

C Zahl	380	380	640	320	320
die Hälfte					

D Zahl	610	850	890	930	330
die Hälfte					

2



AuS 7

3 $387 + 410 =$ _____
 $858 - 350 =$ _____
 $230 + 460 =$ _____
 $933 - 330 =$ _____
 $755 + 180 =$ _____

$656 - 550 =$ _____
 $123 + 240 =$ _____
 $969 - 660 =$ _____
 $354 + 380 =$ _____
 $498 - 220 =$ _____

$258 + 590 =$ _____
 $842 - 350 =$ _____
 $160 + 800 =$ _____
 $831 - 700 =$ _____
 $758 + 240 =$ _____

4

1000

$460 +$ _____

$325 +$ _____

$123 +$ _____

$382 +$ _____

$330 +$ _____

1000

$553 +$ _____

$733 +$ _____

$166 +$ _____

$406 +$ _____

$201 +$ _____

1000

$635 +$ _____

$268 +$ _____

$774 +$ _____

$391 +$ _____

$235 +$ _____

Addieren und subtrahieren



1

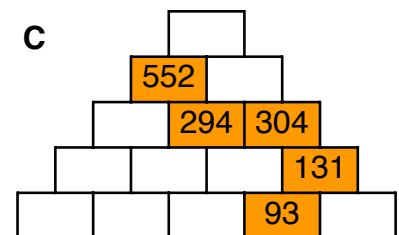
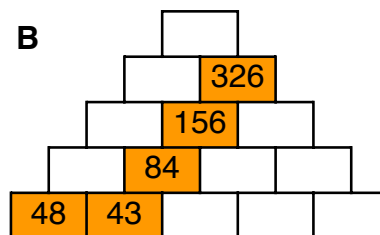
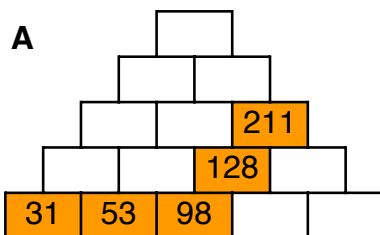
A Zahl	370	380	160	110	370
das Doppelte					

B Zahl	203	276	309	126	408
das Doppelte					

C Zahl	400	580	800	660	480
die Hälfte					

D Zahl	590	610	870	830	850
die Hälfte					

2



AuS 8

3 $384 + 250 =$ _____
 $997 - 250 =$ _____
 $421 + 300 =$ _____
 $986 - 420 =$ _____
 $366 + 540 =$ _____

$823 - 600 =$ _____
 $528 + 330 =$ _____
 $840 - 530 =$ _____
 $197 + 270 =$ _____
 $717 - 310 =$ _____

$160 + 230 =$ _____
 $987 - 190 =$ _____
 $432 + 520 =$ _____
 $975 - 590 =$ _____
 $329 + 220 =$ _____

4

1000

$671 +$ _____

$490 +$ _____

$244 +$ _____

$308 +$ _____

$702 +$ _____

1000

$780 +$ _____

$349 +$ _____

$585 +$ _____

$434 +$ _____

$424 +$ _____

1000

$632 +$ _____

$185 +$ _____

$650 +$ _____

$253 +$ _____

$650 +$ _____

Addieren und subtrahieren



1

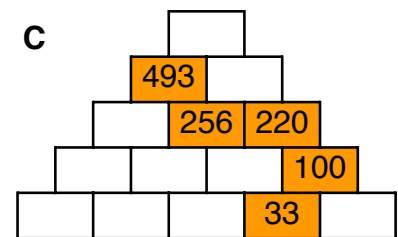
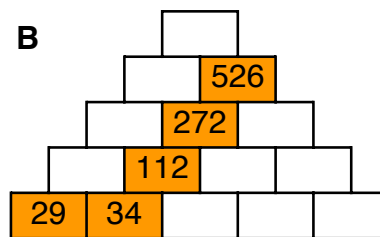
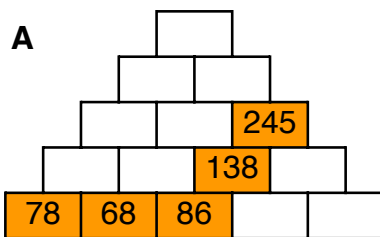
A Zahl	420	140	260	430	190
das Doppelte					

B Zahl	179	325	443	274	172
das Doppelte					

C Zahl	580	800	820	520	940
die Hälfte					

D Zahl	530	430	950	490	730
die Hälfte					

2



AuS 9

3 $122 + 120 =$ _____
 $914 - 190 =$ _____
 $677 + 140 =$ _____
 $839 - 630 =$ _____
 $647 + 250 =$ _____

- 330 = _____
 $471 + 250 =$ _____
 $768 - 260 =$ _____
 $328 + 370 =$ _____
 $548 - 390 =$ _____

$172 + 250 =$ _____
 $698 - 500 =$ _____
 $165 + 670 =$ _____
 $619 - 180 =$ _____
 $674 + 180 =$ _____

4

1000

$603 +$ _____

$578 +$ _____

$637 +$ _____

$379 +$ _____

$455 +$ _____

1000

$222 +$ _____

$384 +$ _____

$127 +$ _____

$626 +$ _____

$403 +$ _____

1000

$157 +$ _____

$577 +$ _____

$576 +$ _____

$311 +$ _____

$283 +$ _____

Addieren und subtrahieren



1

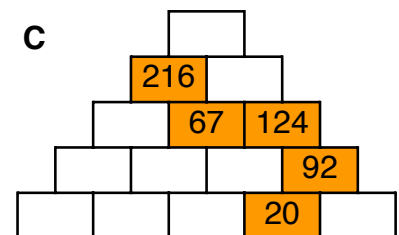
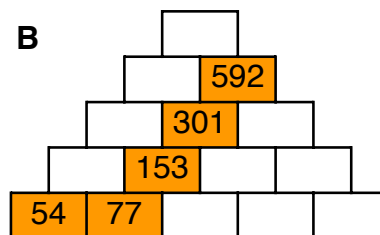
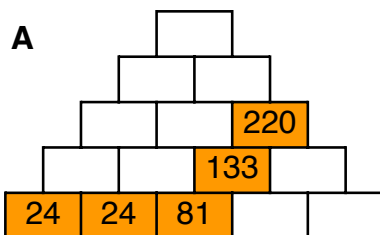
A Zahl	340	320	300	440	210
das Doppelte					

B Zahl	480	374	310	228	488
das Doppelte					

C Zahl	520	840	720	600	320
die Hälfte					

D Zahl	270	650	610	690	770
die Hälfte					

2



AuS 10

3 $155 + 240 =$ _____
 $714 - 180 =$ _____
 $609 + 130 =$ _____
 $572 - 230 =$ _____
 $777 + 200 =$ _____

$411 - 180 =$ _____
 $170 + 640 =$ _____
 $873 - 240 =$ _____
 $442 + 460 =$ _____
 $930 - 150 =$ _____

$168 + 280 =$ _____
 $686 - 490 =$ _____
 $102 + 880 =$ _____
 $441 - 280 =$ _____
 $741 + 140 =$ _____

4

1000

713 + _____
 655 + _____
 642 + _____
 135 + _____
 558 + _____

1000

682 + _____
 799 + _____
 273 + _____
 584 + _____
 695 + _____

1000

700 + _____
 180 + _____
 265 + _____
 244 + _____
 416 + _____